



Addition Fun

Count the images, add the number, and write your answer!


1.  + 2 = _____

2.  + 3 = _____

3.  + 5 = _____

4.  + 2 = _____

5.  + 5 = _____

6.  + 1 = _____