









Addition Fun




Count the images, add the number, and write your answer!






1. ¹ + 4 = 5

2. ¹ ² ³ ⁴ ⁵ + 2 = 7

3. ¹ ² ³ + 4 = 7

4. ¹ ² + 4 = 6

5. ¹ ² ³ + 1 = 4

6. ¹ ² ³ ⁴ ⁵ + 3 = 8