

# Addition Fun




Count the images, add the number, and write your answer!

1.  + 4 = \_\_\_\_\_

2.      + 2 = \_\_\_\_\_

3.    + 4 = \_\_\_\_\_

4.   + 4 = \_\_\_\_\_

5.    + 1 = \_\_\_\_\_

6.      + 3 = \_\_\_\_\_