



Addition Fun


Count the images, add the number, and write your answer!

1.  + 5 $3 + 5 = 8$

2.  + 1 $4 + 1 = 5$

3.  + 5 $5 + 5 = 10$

4.  + 1 $4 + 1 = 5$

5.  + 4 $5 + 4 = 9$

6.  + 3 $3 + 3 = 6$