



Addition Fun


Count the images, add the number, and write your answer!

1.  $+$ **5** $1 + 5 = 6$

2.  $+$ **4** $1 + 4 = 5$

3.  $+$ **5** $4 + 5 = 9$

4.  $+$ **1** $1 + 1 = 2$

5.  $+$ **1** $4 + 1 = 5$

6.  $+$ **1** $3 + 1 = 4$