

Addition Fun





Count the images, add the number, and write your answer!

1.  + 5 = _____

2.  + 4 = _____

3.     + 5 = _____

4.  + 1 = _____

5.     + 1 = _____

6.    + 1 = _____