



Addition Fun


Count the images, add the number, and write your answer!


1.  + 4 $5 + 4 = 9$

2.  + 3 $5 + 3 = 8$

3.  + 2 $1 + 2 = 3$

4.  + 3 $3 + 3 = 6$

5.  + 1 $5 + 1 = 6$

6.  + 1 $5 + 1 = 6$