




# Addition Fun

Count the images, add the number, and write your answer!

1.   $+$  4  $4 + 4 = 8$

2.   $+$  4  $3 + 4 = 7$

3.   $+$  3  $4 + 3 = 7$

4.   $+$  1  $3 + 1 = 4$

5.   $+$  5  $2 + 5 = 7$

6.   $+$  4  $3 + 4 = 7$