




Addition Fun

Count the images, add the number, and write your answer!

1.  $+$ **5** $1 + 5 = 6$

2.  $+$ **2** $5 + 2 = 7$

3.  $+$ **5** $5 + 5 = 10$

4.  $+$ **2** $5 + 2 = 7$

5.  $+$ **5** $3 + 5 = 8$

6.  $+$ **5** $2 + 5 = 7$