






Addition Fun


Count the images, add the number, and write your answer!

1.  + 2 = 3

2.  + 3 = 4

3.   + 2 = 5

4.      + 1 = 6

5.  + 5 = 6

6.    + 4 = 7