










Addition Fun






Count the images, add the number, and write your answer!

1. ¹ + 5 = 6

2. ¹ ² ³ ⁴ + 3 = 7

3. ¹ + 1 = 2

4. ¹ ² ³ ⁴ ⁵ + 2 = 7

5. ¹ ² ³ ⁴ ⁵ + 5 = 10

6. ¹ ² ³ ⁴ + 1 = 5