


Addition Fun





Count the images, add the number, and write your answer!

1.    **4** $2 + 4 = 6$

2.   **2** $1 + 2 = 3$

3.    **3** $2 + 3 = 5$

4.     **4** $3 + 4 = 7$

5.     **1** $3 + 1 = 4$

6.    **2** $2 + 2 = 4$