


# Addition Fun


Count the images, add the number, and write your answer!


1.  + 5  $4 + 5 = 9$

2.  + 3  $3 + 3 = 6$

3.  + 4  $2 + 4 = 6$

4.  + 2  $3 + 2 = 5$

5.  + 5  $5 + 5 = 10$

6.  + 1  $5 + 1 = 6$