


How Many Groups?

Name: _____ Date: _____

★ The rings make equal groups. Write how many groups there are.

1




$$12 \div 4 = \square$$

2



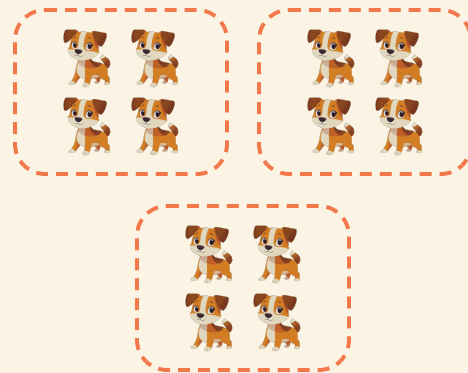
$$4 \div 2 = \square$$

3



$$8 \div 4 = \square$$

4



$$12 \div 4 = \square$$