


# From Adding to Times

Name: \_\_\_\_\_ Date: \_\_\_\_\_


★ Count the equal groups. Finish the multiplication.

1




$$3 \times 4 = \square$$

2




$$4 \times 3 = \square$$

3



$$3 \times 2 = \square$$

4



$$3 \times 2 = \square$$