

Domino Math

Name: _____ Date: _____


★ Count both sides of the domino. Write the sum.

1



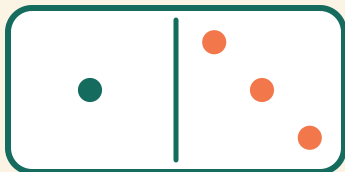
$$6 + 6 = \square$$

2




$$4 + 3 = \square$$

3



$$1 + 3 = \square$$

4



$$2 + 6 = \square$$