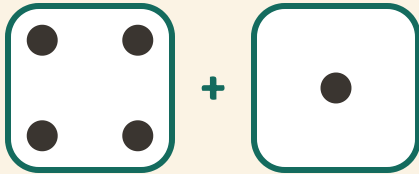


Roll and Add

Name: _____ Date: _____

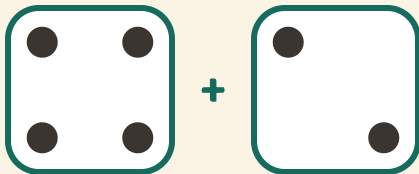
★ Count the dots on both dice. Write the sum.

1



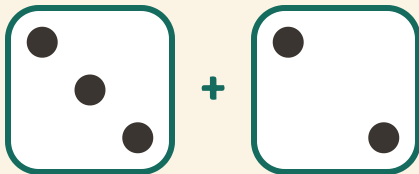
$$4 + 1 = \square$$

2



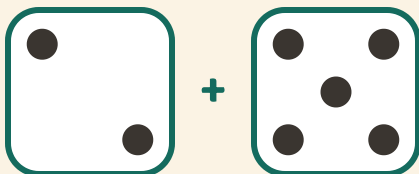
$$4 + 2 = \square$$

3



$$3 + 2 = \square$$

4



$$2 + 5 = \square$$