


Count the Squares

Name: _____ Date: _____


★ Count the squares in the rectangle. Finish the multiplication.

1




$$3 \times 5 = \square$$

2




$$4 \times 4 = \square$$

3



$$4 \times 5 = \square$$

4



$$3 \times 9 = \square$$