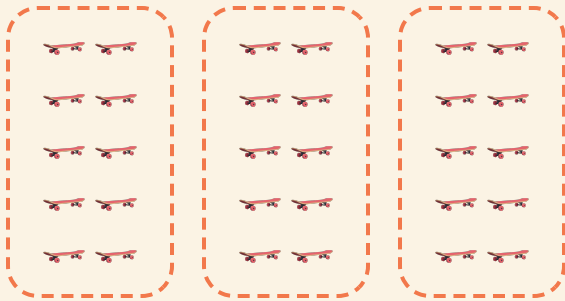


Easy Groups

Name: _____ Date: _____


★ Count the equal groups. Finish the multiplication.

1



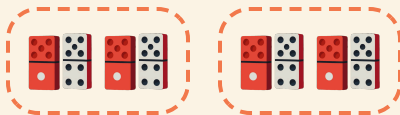
$$3 \times 10 = \square$$

2



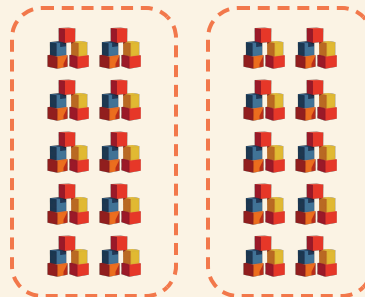
$$4 \times 2 = \square$$

3



$$2 \times 2 = \square$$

4



$$2 \times 10 = \square$$