



Divide It Up

Name: _____ Date: _____


★ Share the pile equally into the bins. Write how many each gets.

1




$$15 \div 3 = \square$$

2



$$9 \div 3 = \square$$

3



$$20 \div 4 = \square$$

4



$$16 \div 4 = \square$$