


How Many Tens?

Name: _____ Date: _____

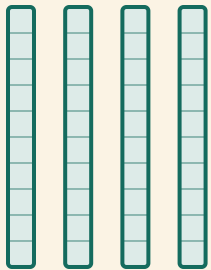
★ Count the ten-rods. Finish the number sentence.

1



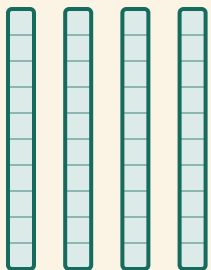
$$\boxed{} \times 10 = \boxed{}$$

2




$$\boxed{} \times 10 = \boxed{}$$

3



$$\boxed{} \times 10 = \boxed{}$$

4



$$\boxed{} \times 10 = \boxed{}$$