


Make a Ten!

Name: _____ Date: _____


 Circle 10 ones to bundle a ten. Write how many tens and ones.

1




$$\boxed{} \times 10 + \boxed{}$$

2




$$\boxed{} \times 10 + \boxed{}$$

3



$$\boxed{} \times 10 + \boxed{}$$

4



$$\boxed{} \times 10 + \boxed{}$$