







Code Breaker Addition



Crack the code! Find the number for each symbol and solve!





1.  +  = 13

2.  +  = 18

3.  +  = 8

4.  +  = 15

5.  +  = 15