







# Code Breaker Addition



Crack the code! Find the number for each symbol and solve!





1.  +  = 4

2.  +  = 12

3.  +  = 3

4.  +  = 10

5.  +  = 12