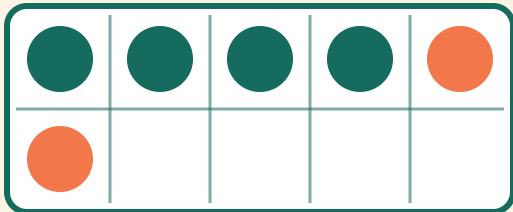


# Ten-Frame Addition

Name: \_\_\_\_\_ Date: \_\_\_\_\_

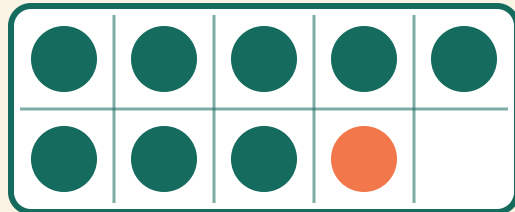
★ Count the two colors. Write the addition sentence's answer.

1



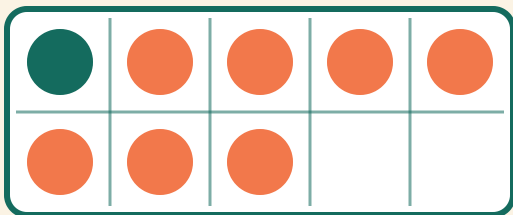
$$4 + 2 = \square$$

2



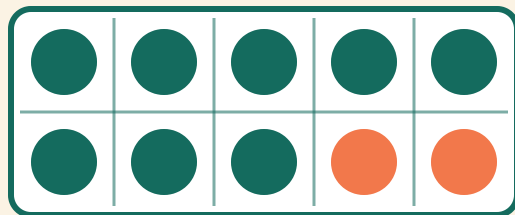
$$8 + 1 = \square$$

3



$$1 + 7 = \square$$

4



$$8 + 2 = \square$$