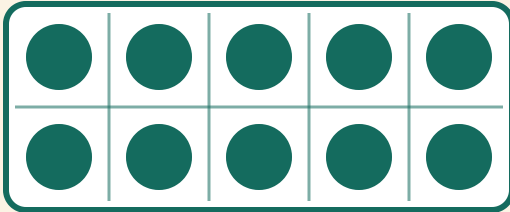


Make 10!

Name: _____ Date: _____

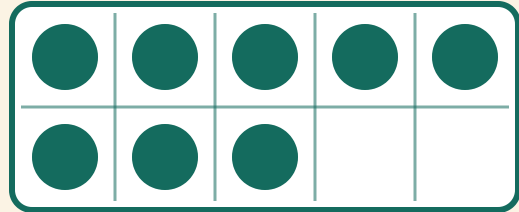
★ How many more dots to make 10? Write the missing number.

1



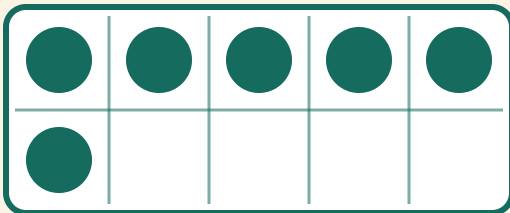
$$10 + \boxed{} = 10$$

2



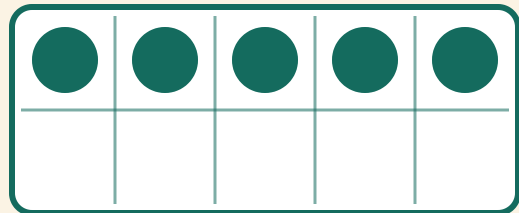
$$8 + \boxed{} = 10$$

3



$$6 + \boxed{} = 10$$

4



$$5 + \boxed{} = 10$$