


Fair Shares?

Name: _____ Date: _____

★ Circle every shape that is cut into EQUAL parts.



1



2



3



4

