


Fair Shares?


Name: _____ Date: _____

★ Circle every shape that is cut into EQUAL parts.


1



2



3



4

