


Find the Fraction

Name: _____ Date: _____

★ Circle the shape that shows the fraction.


1

$$\frac{2}{3}$$




2

$$\frac{1}{2}$$



3

$$\frac{1}{4}$$



4

$$\frac{1}{3}$$

