



Fractions on the Line

Name: _____ Date: _____

★ The dot marks a fraction. Circle which one.

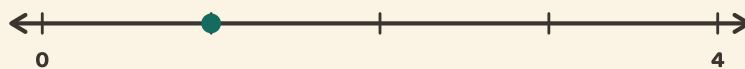
1

0 → 1 in 3 steps



2

0 → 1 in 4 steps



3

0 → 1 in 4 steps



4

0 → 1 in 3 steps

