





Each Picture Counts Double

Name: _____ Date: _____

★ Each picture stands for 2! Write the real count for each row.

		
		
		
		
	= 2	

	=	<input type="text"/>
	=	<input type="text"/>
	=	<input type="text"/>
	=	<input type="text"/>