





Each Picture Means 5

Name: _____ Date: _____

★ Each picture stands for 5! Write the real count for each row.

	 	_____
		_____
	  	_____
	   	_____
	= 5	

	=	<input type="text"/>
	=	<input type="text"/>
	=	<input type="text"/>
	=	<input type="text"/>