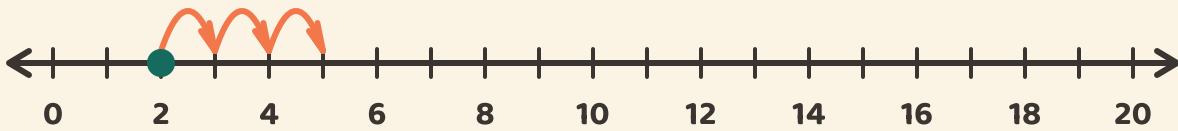


Hop Along the Line!

Name: _____ Date: _____

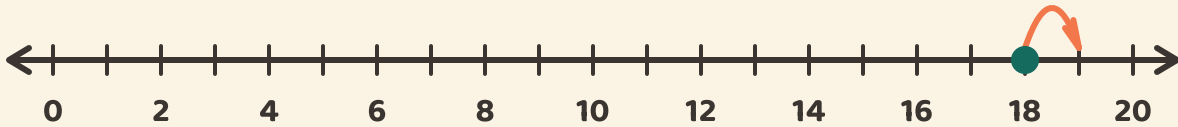
★ Start at the dot. Count the hops. Write the addition answer.

1



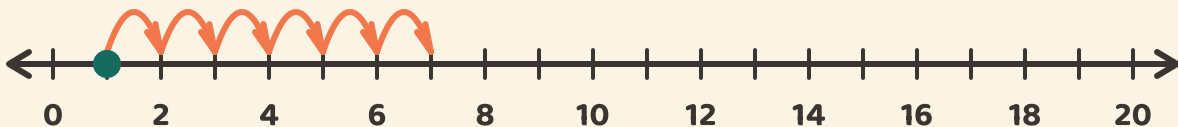
$$2 + 3 = \boxed{}$$

2



$$18 + 1 = \boxed{}$$

3



$$1 + 6 = \boxed{}$$