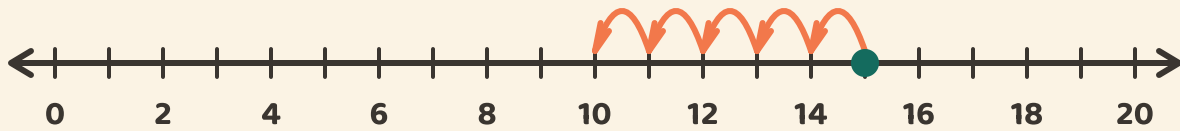


# Hop Back and Subtract

Name: \_\_\_\_\_ Date: \_\_\_\_\_

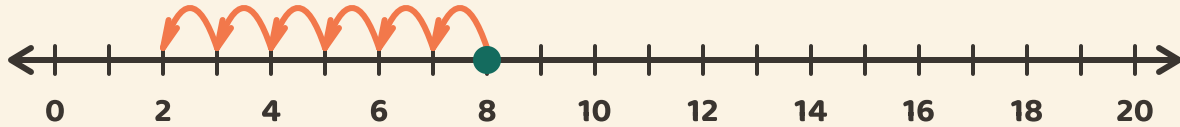
★ Follow the hops backward. Write the subtraction answer.

1



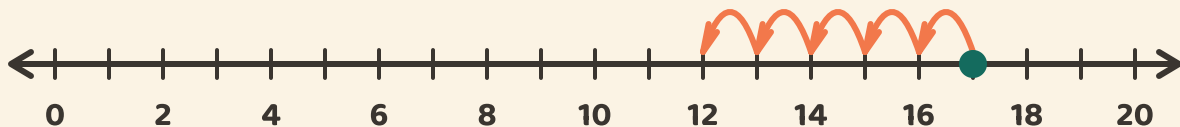
$$15 - 5 = \boxed{\phantom{00}}$$

2



$$8 - 6 = \boxed{\phantom{00}}$$

3



$$17 - 5 = \boxed{\phantom{00}}$$