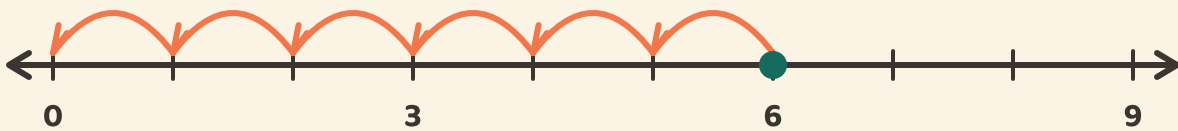


Hop Down to Zero

Name: _____ Date: _____

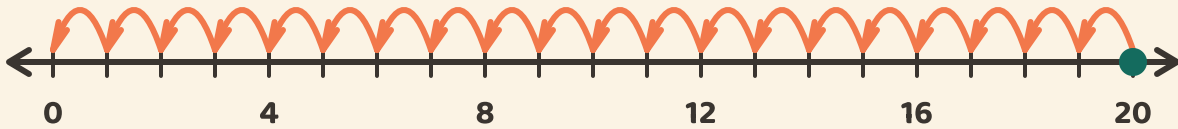
★ Count the equal hops back to zero. Write how many hops it takes.

1



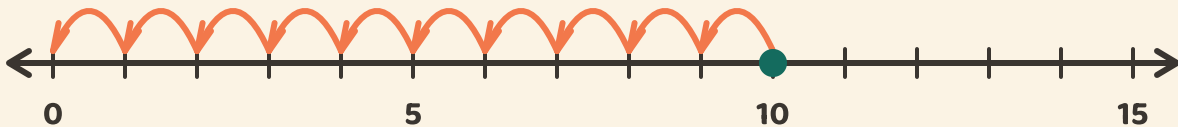
$$6 \div 3 = \boxed{}$$

2



$$20 \div 4 = \boxed{}$$

3



$$10 \div 5 = \boxed{}$$