




Subtraction Fun

Find the missing number to complete the subtraction!

1.  -  ___  1

2.  -  ___  3

3.  -  ___  5

4.  -  ___  1

5.  -  ___  2

6.  -  ___  3