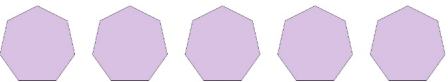




Subtraction Fun

Find the missing number to complete the subtraction!

1.  -  ___ =  3

2.  -  ___ =  1

3.  -  ___ =  2

4.  -  ___ =  2

5.  -  ___ =  4

6.  -  ___ =  8