




# Subtraction Fun

Find the missing number to complete the subtraction!

1.  -  \_\_\_  1

2.  -  \_\_\_  1

3.  -  \_\_\_  4

4.  -  \_\_\_  4

5.  -  \_\_\_  7

6.  -  \_\_\_  7