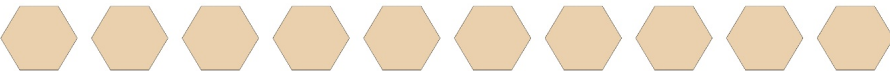



Subtraction Fun

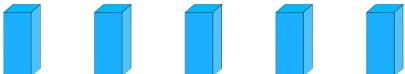
Count the images, subtract the number, and write your answer!

1.  - 1 = _____

2.  - 1 = _____

3.  - 6 = _____

4.  - 4 = _____

5.  - 2 = _____

6.  - 3 = _____