

Make It Balance

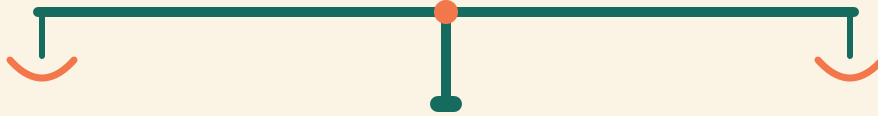
Name: _____ Date: _____

★ Both sides must weigh the same. Write the missing number.

1

$2 + 10$

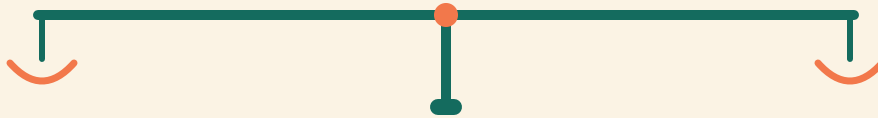
$4 + \square$



2

$16 + 2$

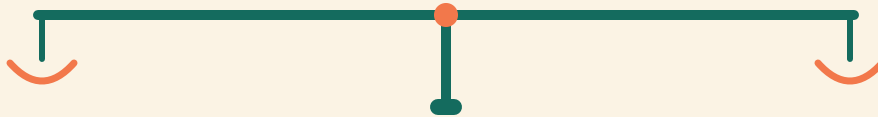
$4 + \square$



3

$17 + 2$

$12 + \square$



4

$9 + 4$

$10 + \square$

