


# Halla el dibujo simétrico


Nombre: \_\_\_\_\_ Fecha: \_\_\_\_\_

★ Rodea el dibujo que es igual de los dos lados.



1





2



3



4



5

