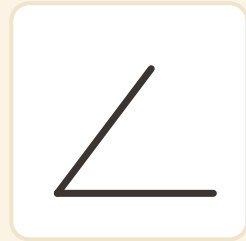
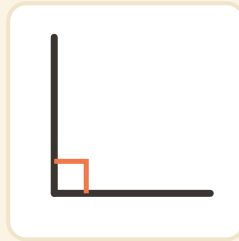
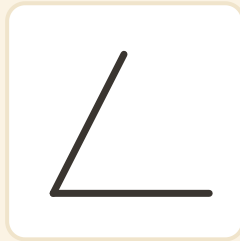
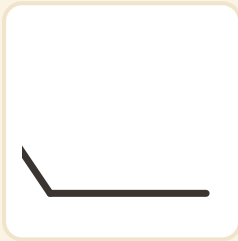


# Caza de ángulos rectos

Nombre: \_\_\_\_\_ Fecha: \_\_\_\_\_

★ Rodea cada ángulo RECTO (los que tienen el cuadradito).

1



2

