


# Súmalo otra vez

Nombre: \_\_\_\_\_ Fecha: \_\_\_\_\_


★ Cada anillo tiene la misma cantidad. Completa la suma.

1



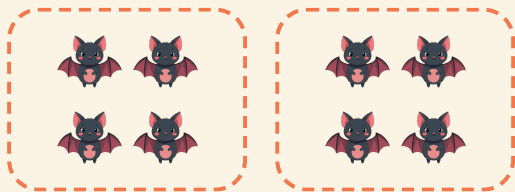
$$4 + 4 = \square$$

2




$$2 + 2 + 2 + 2 = \square$$

3



$$4 + 4 = \square$$

4



$$3 + 3 = \square$$