


# De sumar a multiplicar

Nombre: \_\_\_\_\_ Fecha: \_\_\_\_\_


★ Cuenta los grupos iguales. Completa la multiplicación.

1




$$3 \times 4 = \square$$

2




$$4 \times 3 = \square$$

3



$$3 \times 2 = \square$$

4



$$3 \times 2 = \square$$