


# ¿Cuántos grupos?

Nombre: \_\_\_\_\_ Fecha: \_\_\_\_\_

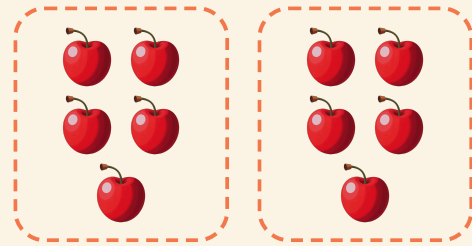
★ Los anillos forman grupos iguales. Escribe cuántos grupos hay.

1




$$20 \div 5 = \square$$

2




$$10 \div 5 = \square$$

3



$$12 \div 3 = \square$$

4



$$4 \div 2 = \square$$