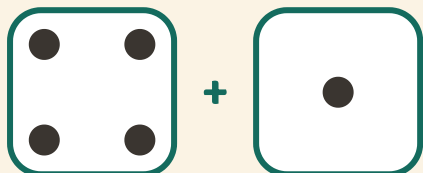


Tira y suma

Nombre: _____ Fecha: _____

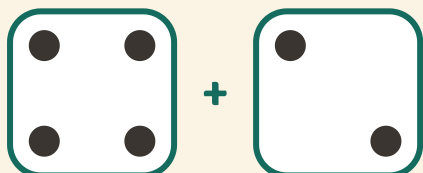
★ Cuenta los puntos de los dos dados. Escribe la suma.

1




$$4 + 1 = \square$$

2



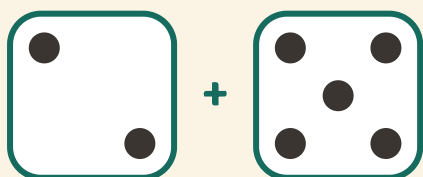
$$4 + 2 = \square$$

3



$$3 + 2 = \square$$

4



$$2 + 5 = \square$$