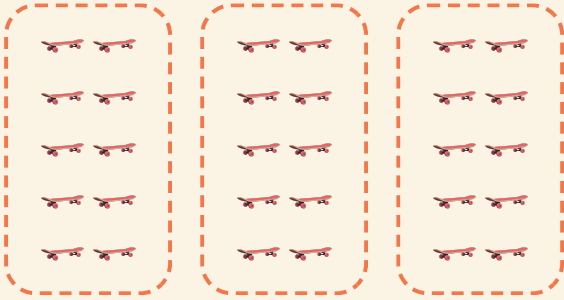


Grupos fáciles

Nombre: _____ Fecha: _____


★ Cuenta los grupos iguales. Completa la multiplicación.

1



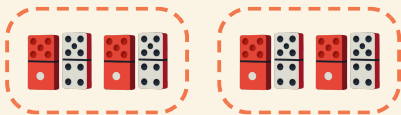
$$3 \times 10 = \square$$

2




$$4 \times 2 = \square$$

3



$$2 \times 2 = \square$$

4



$$2 \times 10 = \square$$