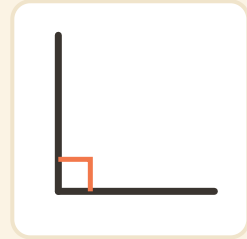
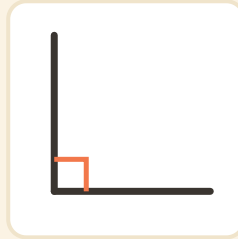
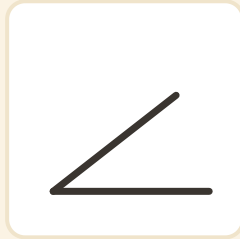
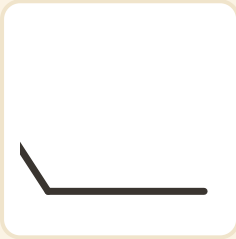


Suorien kulmien jähti

Nimi: _____ Päivämäärä: _____

★ Ympyröi jokainen SUORA kulma (ne, joissa on pieni neliö).

1



2

