

Iso vai Pieni?

Ympyröi suuri esine jokaisessa ruudussa!


1



2




3




4



5



6



7



8

