

Iso vai Pieni?

Ympyröi suuri esine jokaisessa ruudussa!


1




2




3




4




5



6



7



8

